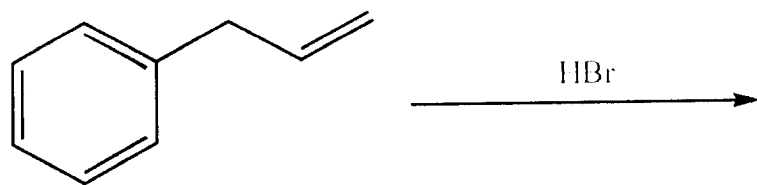



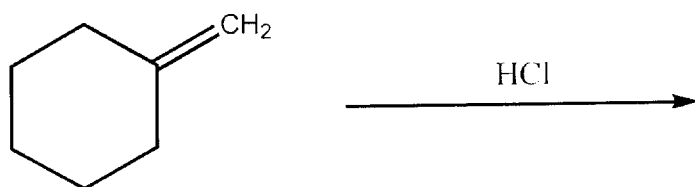
34) Provide the structure of the major organic product of the reaction below.



35) Provide the structure of the major organic product of the reaction below.



36) Provide the structure of the major organic product of the reaction below.



ESSAY. Write your answer in the space provided or on a separate sheet of paper.

37) Provide the structure of the product which results when the alkene below is treated with C_3 followed by $(\text{CH}_3)_2\text{S}$.

