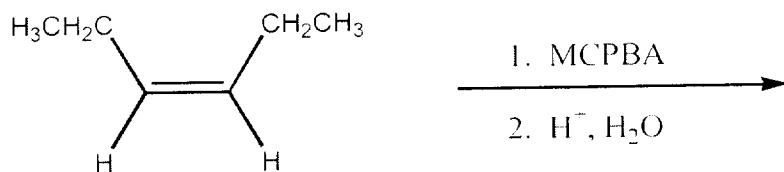
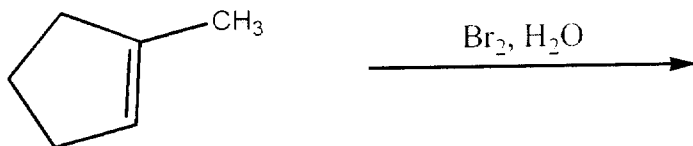


SHORT ANSWER. Write the word or phrase that best completes each statement or answers the question.

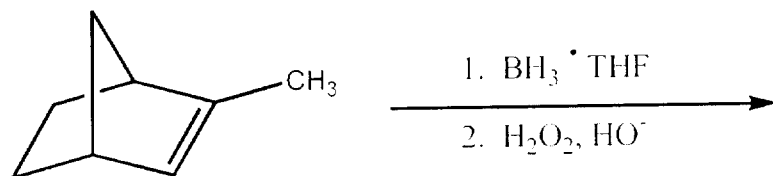
28) Provide the structure of the major organic product of the reaction below.



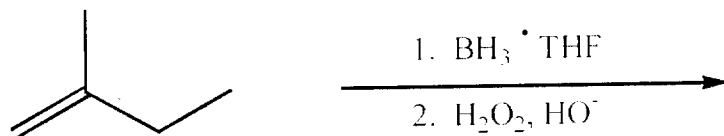
29) Provide the structure of the major organic product of the reaction below.



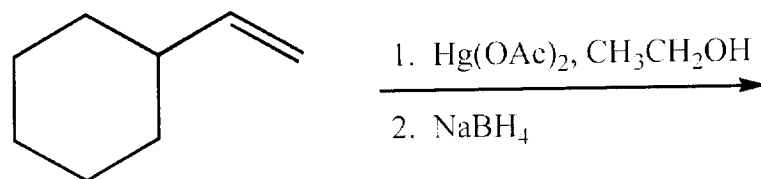
30) Provide the structure of the major organic product of the reaction below.



31) Provide the structure of the major organic product of the reaction below.



32) Provide the structure of the major organic product of the reaction below.



33) Provide the structure of the major organic product of the reaction below.

