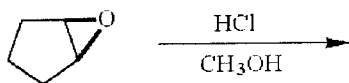


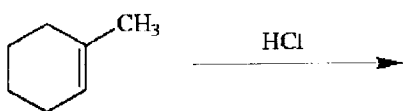
Name _____

ESSAY. Write your answer in the space provided or on a separate sheet of paper.

- 1) Draw the major organic product generated in the reaction below. Pay particular attention to regio- and stereochemical detail.



- 2) Draw the major organic product generated in the reaction below. Pay particular attention to regio- and stereochemical detail.



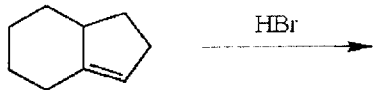
- 3) Draw the major organic product generated in the reaction below. Pay particular attention to regio- and stereochemical detail.



- 4) Draw the major organic product generated in the reaction below. Pay particular attention to regio- and stereochemical detail.



- 5) Draw the major organic product generated in the reaction below. Pay particular attention to regio- and stereochemical detail.



- 6) Draw the major organic product generated in the reaction below. Pay particular attention to regio- and stereochemical detail.

