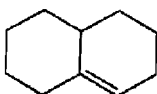


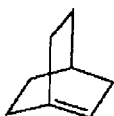
10) Does the alkene shown below violate Bredt's rule?



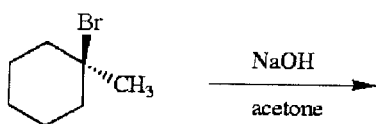
11) Does the alkene shown below violate Bredt's rule?



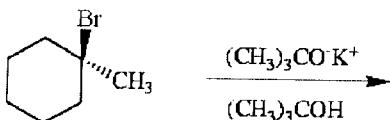
12) Does the alkene shown below violate Bredt's rule?



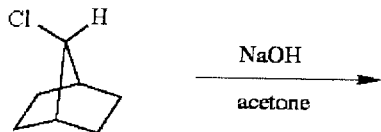
13) Draw all likely alkene products in the following reaction and circle the product you expect to predominate.



14) Draw all likely alkene products in the following reaction and circle the product you expect to predominate.



15) Draw all likely alkene products in the following reaction and circle the product you expect to predominate.



16) Draw all likely alkene products in the following reaction and circle the product you expect to predominate.

