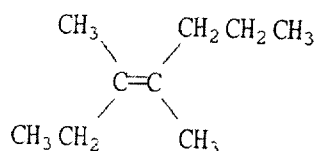


~~Review~~ Review.

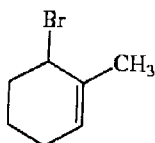
Name _____

ESSAY. Write your answer in the space provided or on a separate sheet of paper.

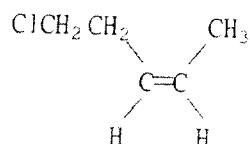
1) Provide the proper IUPAC name for the alkene shown below.



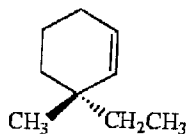
2) Provide the proper IUPAC name for the alkene shown below.



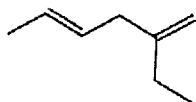
3) Provide the proper IUPAC name for the alkene shown below.



4) Provide the proper IUPAC name for the alkene shown below.



5) Provide the proper IUPAC name for the alkene shown below.



6) Draw an acceptable structure for 4-phenylbut-1-ene.

7) Draw an acceptable structure for (Z)-2-chloro-4-ethylhex-2-ene.

8) Draw an acceptable structure for 1,2-dimethylcyclohexene.

9) Draw and name the six alkenes which have the molecular formula C₅H₁₀.