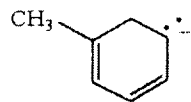
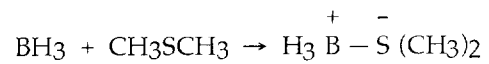


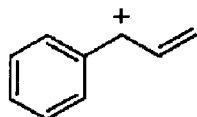
12) Draw the important resonance forms of:



13) In the reaction below, label each reactant as a nucleophile or an electrophile.



14) Draw the important resonance forms for the structure shown below.



15) Draw the important resonance forms for the structure shown below.

