

Review Questions

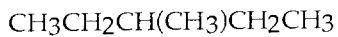
Name \_\_\_\_\_

**ESSAY.** Write your answer in the space provided or on a separate sheet of paper.

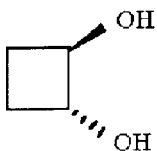
1) Is the molecule shown below chiral or achiral?



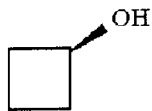
2) Is the molecule shown below chiral or achiral?



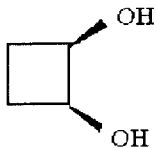
3) Is the molecule shown below chiral or achiral?



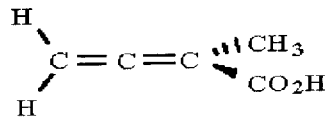
4) Is the molecule shown below chiral or achiral?



5) Is the molecule shown below chiral or achiral?



6) Is the molecule shown below chiral or achiral?



7) Is the molecule shown below chiral or achiral?

